









Memorial Day

PICTOGRAPH

Aaron	
Adeline	
Adora	
Alexander	
Alfredo	
Anna	
Avery	
Bailey	

key:  equals 4 flags

1. How many flags did Anna make? _____
2. How many flags did Alfredo make? _____
3. How many more flags did Alexander make than Adora? _____
4. How many flags did Aaron make? _____
5. Name two people who made the same number of flags. _____
6. How many more flags did Bailey make than Adeline? _____
7. How many flags did Avery make? _____